
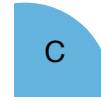



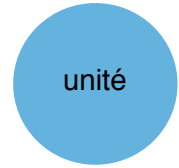
1

Quelle fraction de l'unité représente chaque surface ?



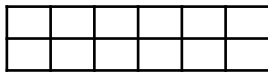




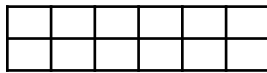


2

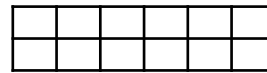
Colorie ces rectangles pour représenter les différentes fractions :




$$\frac{1}{3}$$



$$\frac{2}{4}$$



$$\frac{2}{6}$$




3

Quelle fraction de la bande totale représente la partie colorée ?














4

Ecris sous forme de fractions :


72 dixièmes

47 centièmes

En minutes, que représente :

$\frac{1}{4}$ d'heure _____

$\frac{3}{4}$ d'heure _____



5
12