
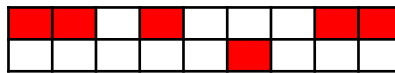



1 Quelle fraction correspond à la partie colorée ?











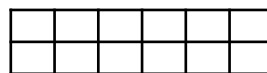
2 Colorie ces rectangles pour représenter les différentes fractions :




$$\frac{1}{2}$$



$$\frac{1}{4}$$



$$\frac{1}{12}$$



3 Quelle fraction du carré représente la partie colorée dans chaque dessin ?



A



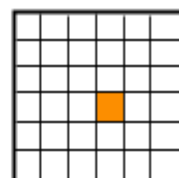
B




C



D



E



4 Ecris sous forme de fractions :


72 dixièmes

47 centièmes

Ecris les fractions en lettres :

$$\frac{4}{3}$$

$$\frac{5}{4}$$



5
12