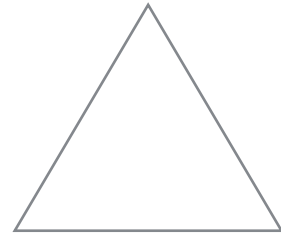
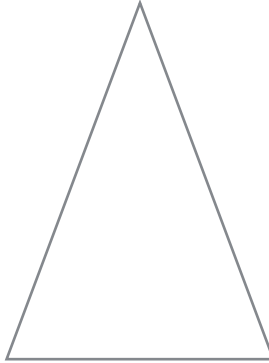
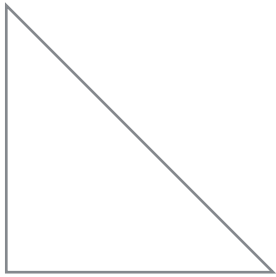




1 Colorie les triangles selon le code couleur :



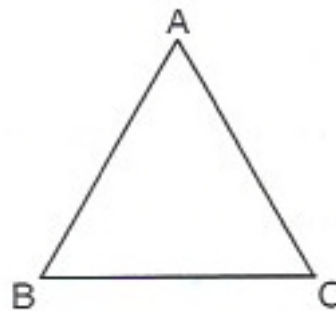
isocèle - équilatéral - rectangle



2 Construis un triangle rectangle dont les côtés de l'angle droit mesurent 2 cm et 6 cm.



3 Mesure les trois côtés de ce triangle.



Quel est le nom de ce triangle ?

\_\_\_\_\_

