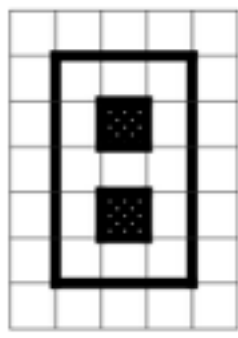
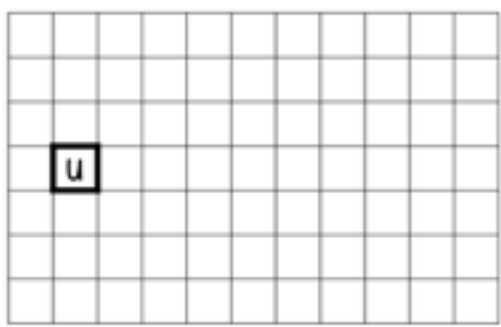



1 Exprime l'aire de chaque surface :



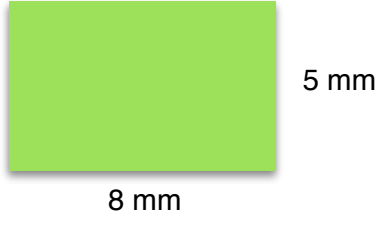
Quelle est l'aire de cette figure ?

Trace une figure dont l'aire est de 15 u

.....




2 Calcule :

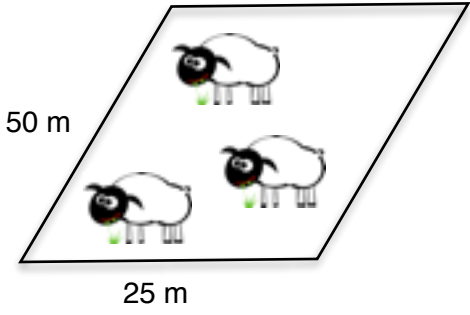


L'aire du carré :

L'aire du rectangle :



3 Problème :



Calcule l'aire de ce champ rectangulaire ?

.....

